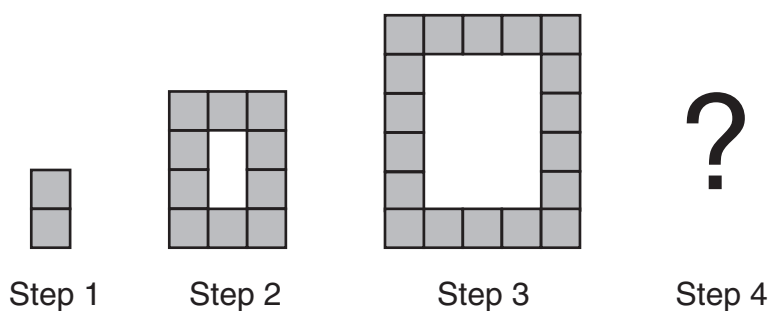


1 What is the area of the shape?

- A** 240 cm²
- B** 320 cm²
- C** 400 cm²
- D** 480 cm²

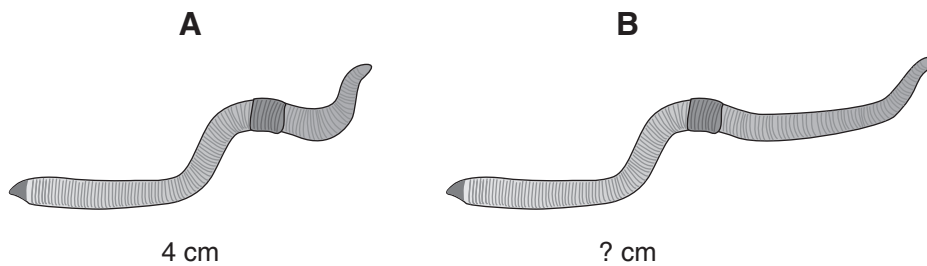
2 There are two blocks in Step 1, and 10 blocks in Step 2.



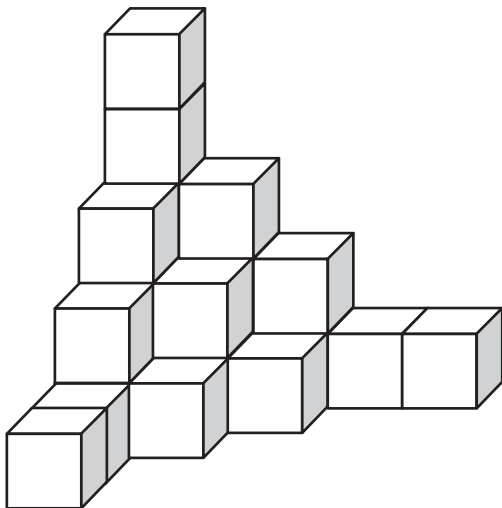
How many blocks will there be in Step 4?

- A** 20
- B** 26
- C** 36
- D** 40

- 3** The ratio of the length of Worm A to Worm B is 2 : 3.
What is the length of Worm B?



- A** 2 cm
- B** 5 cm
- C** 6 cm
- D** 12 cm



- 4** What is the total number of small cubes in this stack?
- A** 13
 - B** 20
 - C** 23
 - D** 25